





Maths Challenge Cards



Are you a maths whizz ?

Copyright 2011 www.tpet.co.uk



- ★ Draw a hexagon and label the properties.
- ★ How many faces, edges and vertices does a cube have?
- ★ Describe a square based pyramid to a friend.
Can they guess the shape?

