





# Year 1 Mental Maths

## Block 1 Test 2

Name: \_\_\_\_\_ Date: \_\_\_\_\_

1.	 _____ bikes	6.	 16 cubes  18 cubes						
2.	<table border="1" data-bbox="204 875 782 969"><tr><td>5</td><td></td><td></td><td>8</td><td></td><td>10</td></tr></table>	5			8		10	7.	_____ apples
5			8		10				
3.		8.							
4.	_____ beads	9.							
5.	_____ fingers	10.							